

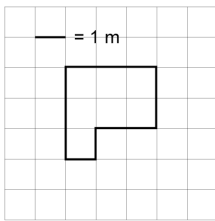
Master 9.25

Extra Practice 3

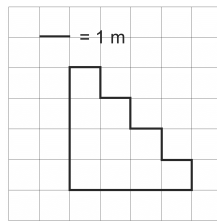
Lesson 5: Measuring Perimeter in Metres

1. Find the perimeter of each figure.

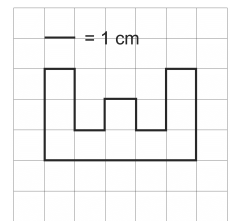
a) _____



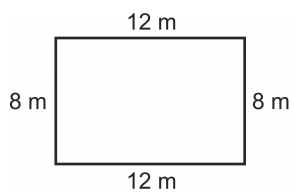
b) _____



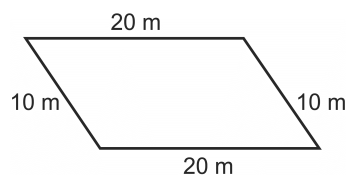
c) _____



d) _____



e) _____



f) _____

